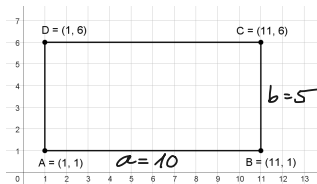
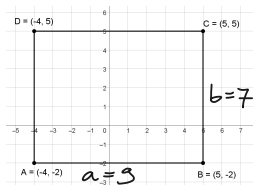


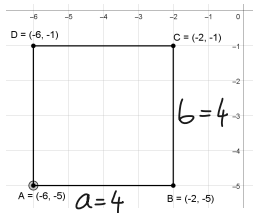
Hány területesség az ábrán látható téglalapok területe?



$$T = 10 \cdot 5 = 50$$

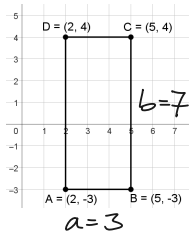


$$T = 9 \cdot 7 = 63$$



$$T = 4 \cdot 4 = 16$$

(négyzet)



$$T = 3 \cdot 7 = 21$$