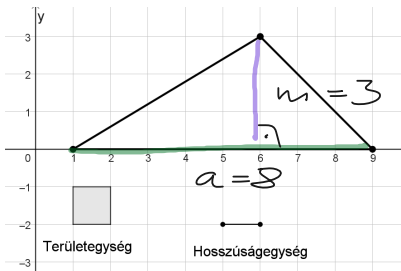
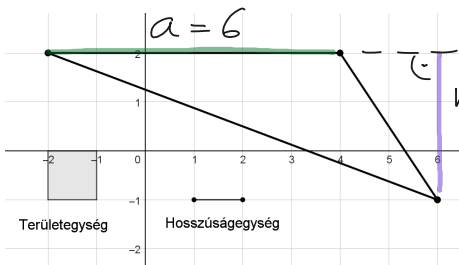


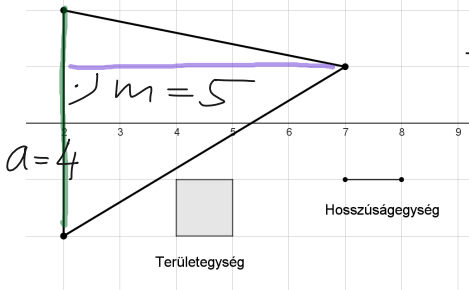
Számold ki az ábrán látható háromszögek területét!



$$T = \frac{8 \cdot 3}{2} = \underline{\underline{12}}$$



$$T = \frac{6 \cdot 3}{2} = \underline{\underline{9}}$$



$$T = \frac{4 \cdot 5}{2} = \underline{\underline{10}}$$