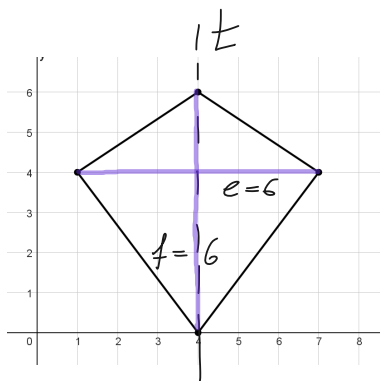
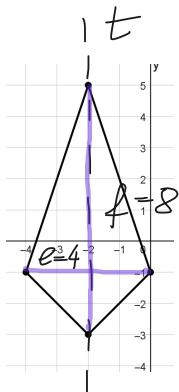


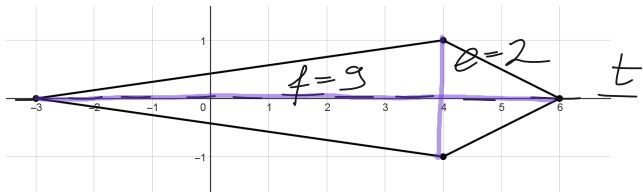
Számold ki az ábrán látható deltoidok területét!



$$T = \frac{6 \cdot 6}{2} = \underline{\underline{18}}$$



$$T = \frac{4 \cdot 8}{2} = \underline{\underline{16}}$$



$$T = \frac{2 \cdot 9}{2} = \underline{\underline{9}}$$