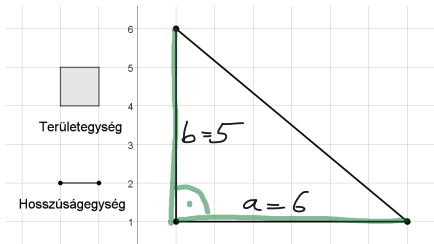
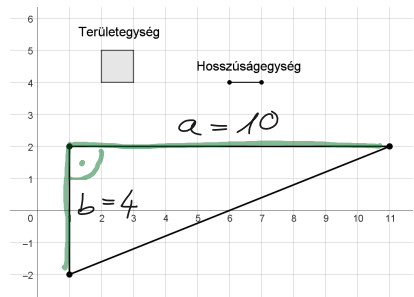


Számold ki az ábrán látható derékszögű háromszögek területét!



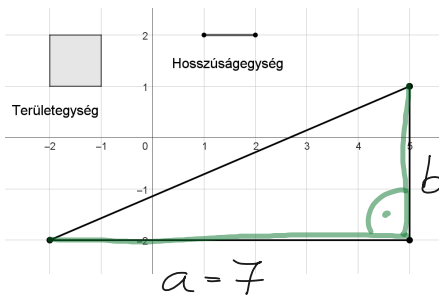
$$T = \frac{5 \cdot 6}{2} =$$

$$= \underline{\underline{15}}$$



$$T = \frac{10 \cdot 4}{2} =$$

$$= \underline{\underline{20}}$$



$$T = \frac{7 \cdot 3}{2} =$$

$$= \underline{\underline{10,5}}$$